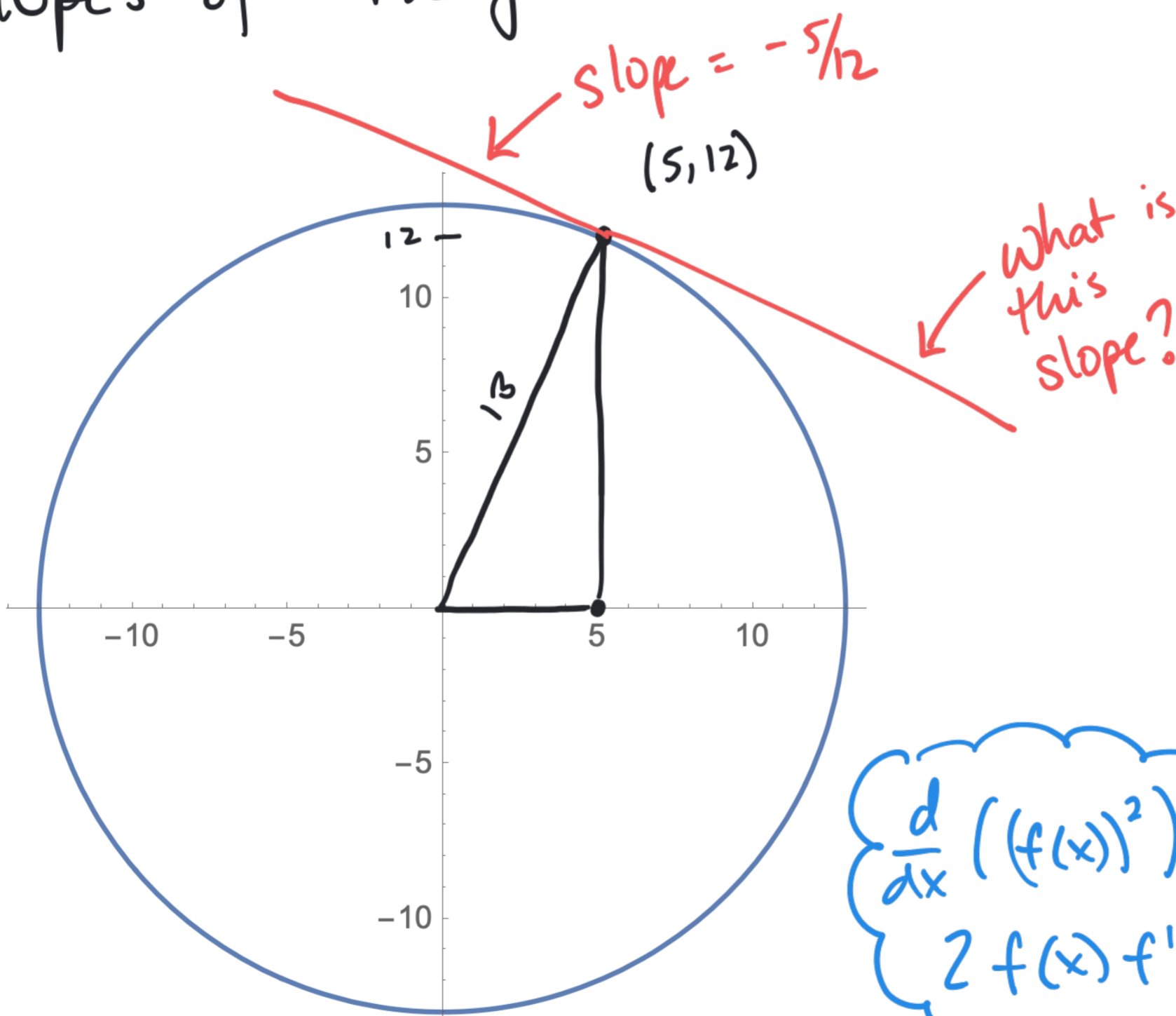


Intro Video: Section 3.5
Implicit Differentiation

Math F251X: Calculus I

Suppose you have a curve described in terms of x and y (not a function). Can we find slopes of tangent lines?

y is some function of x



$$x^2 + y^2 = 169 = 13^2$$

$$x^2 + y^2 = 13^2$$

$$\frac{d}{dx}(x^2 + y^2) = \frac{d}{dx}(13^2)$$

$$\frac{d}{dx}(x^2) + \frac{d}{dx}(y^2) = \frac{d}{dx}(13^2)$$

$$2x + \frac{d}{dx}(y^2) = 0$$

$\frac{d}{dx}((f(x))^2) = 2f(x)f'(x)$

$$2x + 2yy' = 0$$

$$y' = \frac{-2x}{2y} = \frac{-x}{y}$$

$$y'|_{(5,12)} = \frac{-5}{12} \left\{ \begin{array}{l} \leftarrow x\text{-value of point} \\ \leftarrow y\text{-value of point} \end{array} \right.$$

Example: Find the equation of the tangent line(s)

the curve $x^2 - 2(y-3)^2 = 4$ at the point(s) where $x = -6$.

$$\frac{d}{dx}(x^2 - 2(y-3)^2) = \frac{d}{dx}(4) \Rightarrow$$

$$\frac{d}{dx}(x^2) - 2 \frac{d}{dx}((y-3)^2) = 0 \Rightarrow$$

$$2x - 2 \cdot 2(y-3) \frac{dy}{dx} = 0.$$

$$\frac{dy}{dx} = \frac{2x}{-4(y-3)} = -\frac{x}{2(y-3)}$$

What is y when $x = -6$?

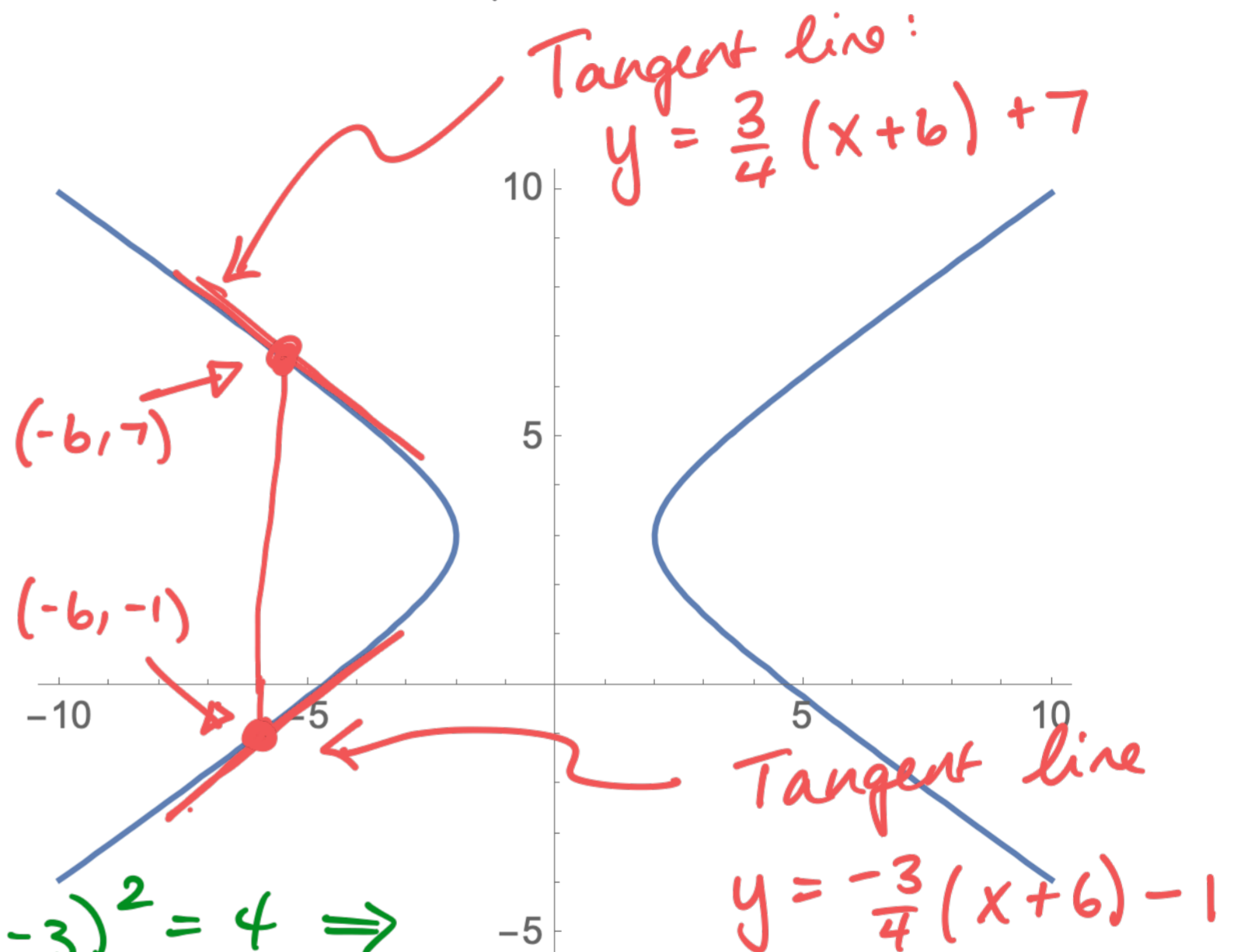
Substitute $x = -6$ into $x^2 - 2(y-3)^2 = 4 \Rightarrow$

$$(-6)^2 - 2(y-3)^2 = 4 \Rightarrow -2(y-3)^2 = 4 - 36 = -32 \Rightarrow (y-3)^2 = +16$$

$$\Rightarrow y-3 = 4 \text{ or } y-3 = -4 \Rightarrow \boxed{y=7 \text{ or } y=-1}$$

$$\left. \frac{dy}{dx} \right|_{(-6,7)} = \frac{-6}{-2(7-3)} = \frac{-6}{-8} = \frac{3}{4}$$

$$\left. \frac{dy}{dx} \right|_{(-6,-1)} = \frac{-6}{-2(-1-3)} = \frac{-6}{8} = -\frac{3}{4}$$



Example: Find $\frac{dy}{dx}$ if $x^2 - xy + y^2 = 3$.

$$\frac{d}{dx}(x^2 - xy + y^2) = \frac{d}{dx}(3) \Rightarrow$$

$$2x - \frac{d}{dx}(xy) + \frac{d}{dx}(y^2) = 0 \Rightarrow$$

$$2x - \left(x \frac{dy}{dx} + y(1)\right) + 2y \frac{dy}{dx} = 0 \Rightarrow$$

$$2x - x \frac{dy}{dx} - y + 2y \frac{dy}{dx} = 0 \Rightarrow$$

$$2y \frac{dy}{dx} - x \frac{dy}{dx} = y - 2x \Rightarrow$$

$$\frac{dy}{dx}(2y - x) = y - 2x \Rightarrow$$

So $\boxed{\frac{dy}{dx} = \frac{y - 2x}{2y - x}}$

Example Find $\frac{dy}{dx}$ if $\cos(xy) = 1 + \sin(y)$.

$$\frac{d}{dx} (\cos(xy)) = \frac{d}{dx} (1 + \sin(y))$$

$$- \sin(xy) \left[x \frac{dy}{dx} + y(1) \right] = \cos(y) \frac{dy}{dx}$$

$$- x \sin(xy) \frac{dy}{dx} - y \sin(xy) = \frac{dy}{dx} (\cos(y)) \Rightarrow$$

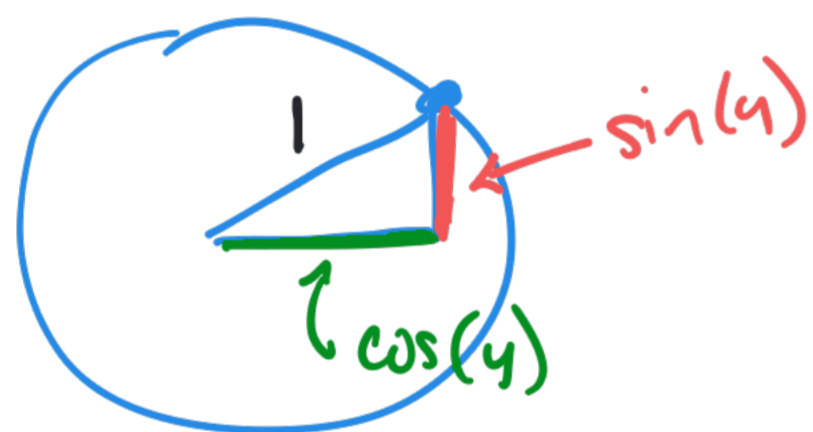
$$\frac{dy}{dx} (\cos(y) + x \sin(xy)) = -y \sin(xy) \Rightarrow$$

Derivatives of Inverse Trig functions:

What is the derivative of $y = \arcsin(x)$?

$$y = \arcsin(x) \iff x = \sin(y).$$

$$\frac{d}{dx}(x) = \frac{d}{dx}(\sin(y)) \Rightarrow 1 = \cos(y) \frac{dy}{dx} \Rightarrow \frac{dy}{dx} = \frac{1}{\cos(y)}$$



$$1 = (\sin(y))^2 + (\cos(y))^2 \Rightarrow (\cos(y))^2 = 1 - (\sin(y))^2$$



← Range of arcsine:
 $\cos(y) > 0$

$$\begin{aligned} \cos(y) &= \sqrt{1 - (\sin(y))^2} \\ &= \sqrt{1 - x^2} \end{aligned}$$

Therefore, $\frac{d}{dx}(y) = \frac{d}{dx}(\arcsin(x)) = \frac{1}{\sqrt{1-x^2}}$.

Example: Find the point(s) on the curve $x^3 + y^3 = 6xy$ where the tangent line is horizontal.

$$\rightarrow \frac{dy}{dx} = 0 \text{ for what } (x, y)?$$

$$\frac{d}{dx}(x^3 + y^3) = \frac{d}{dx}(6xy)$$

$$3x^2 + 3y^2 \frac{dy}{dx} = 6\left(x \frac{dy}{dx} + y(1)\right)$$

$$3x^2 + 3y^2 \frac{dy}{dx} = 6x \frac{dy}{dx} + 6y \Rightarrow$$

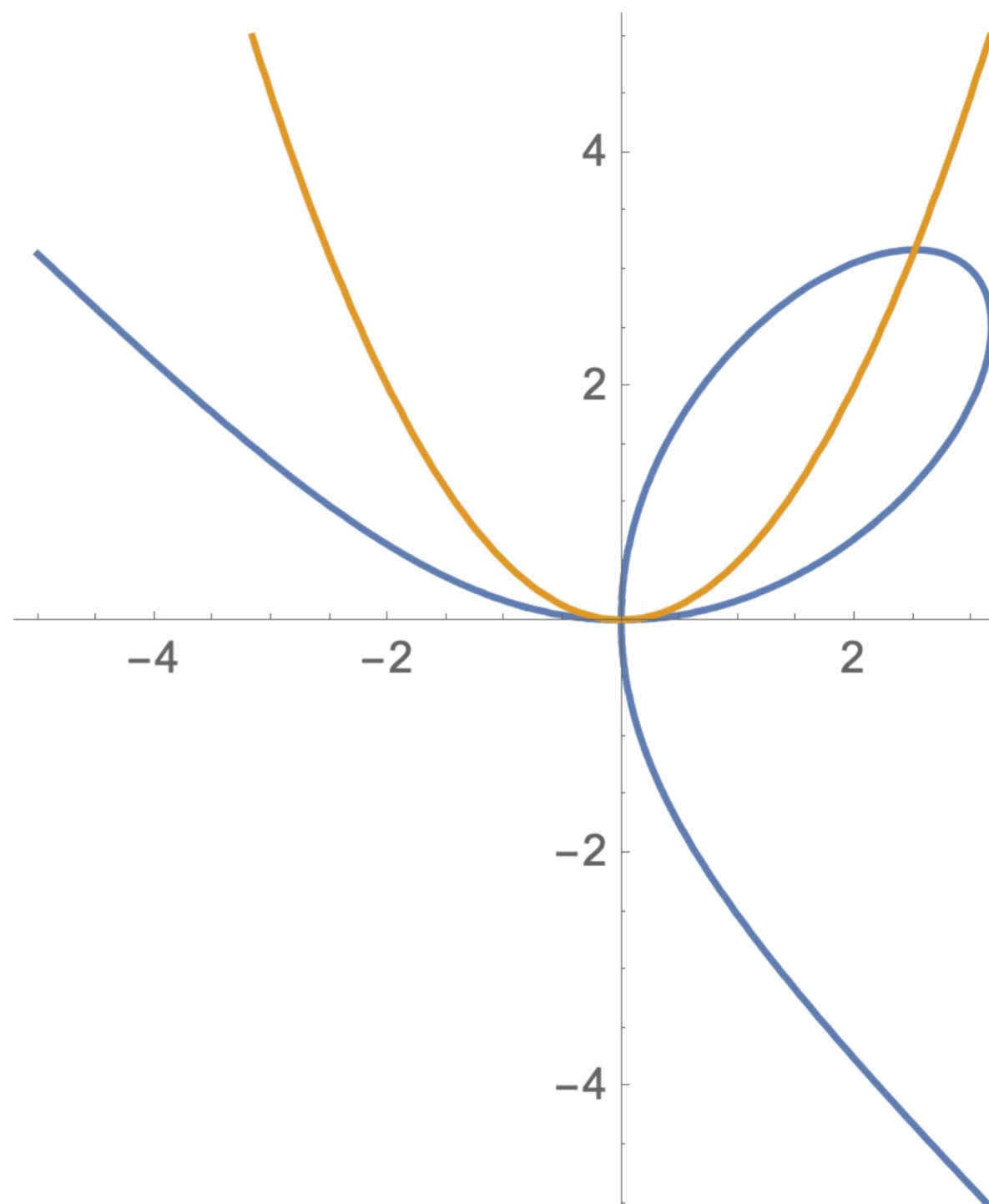
$$3y^2 \frac{dy}{dx} - 6x \frac{dy}{dx} = 6y - 3x^2 \Rightarrow$$

$$\frac{dy}{dx} = \frac{6y - 3x^2}{3y^2 - 6x} = \frac{2y - x^2}{y^2 - 2x}$$

$$\text{So } \frac{dy}{dx} = 0 \Rightarrow \frac{6y - 3x^2}{3y^2 - 6x} = 0 \Rightarrow 6y - 3x^2 = 0 \Rightarrow 3x^2 = 6y \Rightarrow y = \frac{x^2}{2}$$

Need

$$x^3 + \left(\frac{x^2}{2}\right)^3 = 6x\left(\frac{x^2}{2}\right) \Rightarrow x^3 + \frac{x^6}{8} = 3x^3 \Rightarrow x^3 - 3x^3 + \frac{x^6}{8} = 0 \Rightarrow x^3\left(-2 + \frac{x^3}{8}\right) = 0$$



So:
 $x^3\left(-2 + \frac{x^3}{8}\right) = 0$

Thus:
 $x^3 = 0 \Rightarrow x = 0$

or
 $-2 + \frac{x^3}{8} = 0 \Rightarrow$

$$\frac{x^3}{8} = 2 \Rightarrow$$

$$x^3 = 16 \Rightarrow$$

$$x = \sqrt[3]{16} = 2\sqrt[3]{2}$$

Recap: ① Our curve is $x^3 + y^3 = 6xy$

② $\frac{dy}{dx} = \frac{2y - x^2}{y^2 - 2x}$

③ for $\frac{dy}{dx} = 0$, need $y = \frac{x^2}{2}$.

④ Substituting $y = \frac{x^2}{2}$ into the curve yields $x=0$ or $x = \sqrt[3]{16} = 2\sqrt[3]{2}$

Substitute these into our curve:

$x=0$: $0^3 + y^3 = 6(0)y \Rightarrow y^3 = 0 \Rightarrow y = 0$.

$x = \sqrt[3]{16}$: $(\sqrt[3]{16})^3 + y^3 = 6(\sqrt[3]{16})y \Rightarrow 16 + y^3 = 6\sqrt[3]{16}y$

$\Rightarrow y^3 - 6\sqrt[3]{16}y + 16 = 0$

STOP! Substitute it into the other function, which controls when

$\frac{dy}{dx} = 0$. When $x = \sqrt[3]{16}$, $y = \frac{(\sqrt[3]{16})^2}{2} = 16^{2/3} \cdot 2^{-1} = (2^4)^{2/3} (2^{-1}) = 2^{5/3} = 2\sqrt[3]{2^2}$

ANSWER: TL is horizontal at $(0,0)$ and $(2\sqrt[3]{2}, 2\sqrt[3]{2^2})$

